

BEWERKINGEN

Voor het eerste leerjaar

Meester Warre
www.meesterwarre.be




@meester_warre



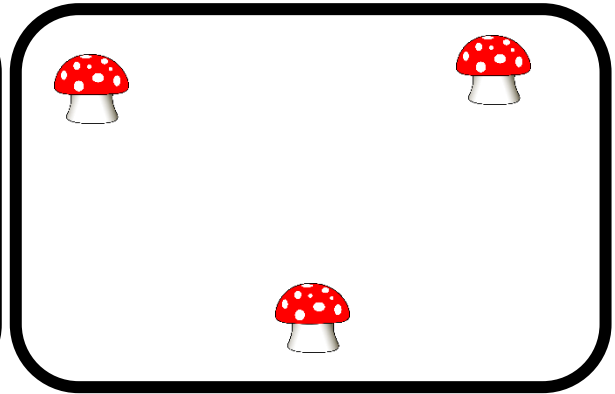
Meester Warre

Optellen tot 20 met brug


1. Teken bij tot je er 10 hebt. Vul in.




$$7 + \dots = 10$$




$$3 + \dots = 10$$




$$5 + \dots = 10$$



$$8 + \dots = 10$$




$$6 + \dots = 10$$



$$4 + \dots = 10$$

2. Maak 10.



3. Vul aan.

$7 + \dots = 10$

$1 + \dots = 10$

$4 + \dots = 10$

$3 + \dots = 10$

$9 + \dots = 10$

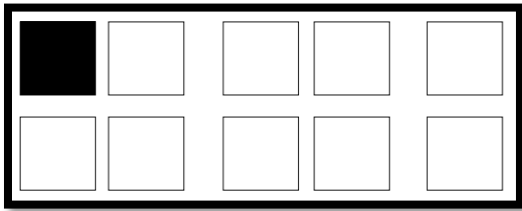
$2 + \dots = 10$

$5 + \dots = 10$

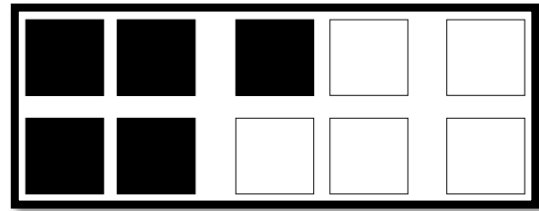
$8 + \dots = 10$

$6 + \dots = 10$


4. Kleur tot je er 10 hebt. Vul in.



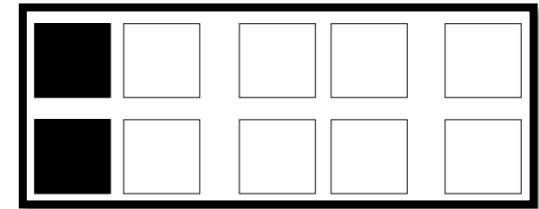
$$1 + \dots = 10$$



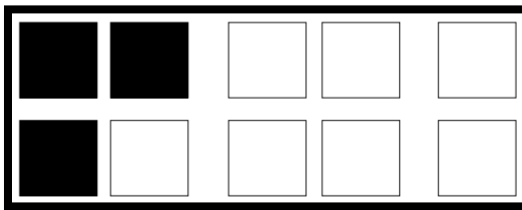
$$5 + \dots = 10$$




$$7 + \dots = 10$$



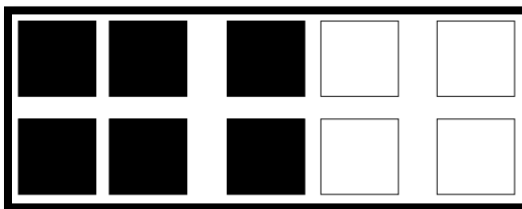
$$2 + \dots = 10$$



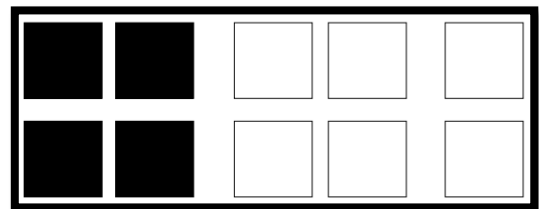
$$\dots + \dots = 10$$



$$\dots + \dots = 10$$



$$\dots + \dots = 10$$



$$\dots + \dots = 10$$

5. Los op.

$9 + 1 = \dots\dots$

$9 + 1 + 6 = \dots\dots$

$3 + 7 = \dots\dots$

$3 + 7 + 9 = \dots\dots$

$2 + 8 = \dots\dots$

$2 + 8 + 1 = \dots\dots$

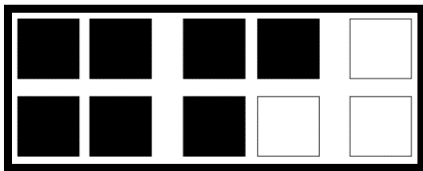
$5 + 5 = \dots\dots$

$5 + 5 + 5 = \dots\dots$

$6 + 4 = \dots\dots$


$6 + 4 + 7 = \dots\dots$

6. Los op. Maak eerst een groepje van 10.



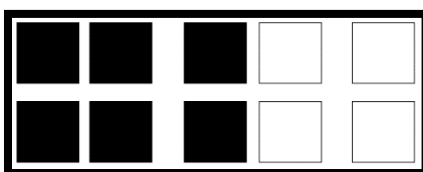
$7 + 8 = \dots\dots$

3 5




$9 + 3 = \dots\dots$

1 2





$6 + 8 = \dots\dots$

4 4



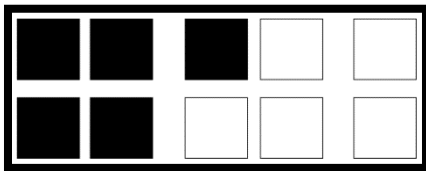
$$8 + 3 = \dots\dots$$

$$\begin{array}{c} \wedge \\ \dots \quad \dots \end{array}$$




$$7 + 9 = \dots\dots$$

$$\begin{array}{c} \wedge \\ \dots \quad \dots \end{array}$$





$$5 + 8 = \dots\dots$$

$$\begin{array}{c} \wedge \\ \dots \quad \dots \end{array}$$





$$8 + 6 = \dots\dots$$

$$\begin{array}{c} \wedge \\ \dots \quad \dots \end{array}$$



$$9 + 9 = \dots\dots$$

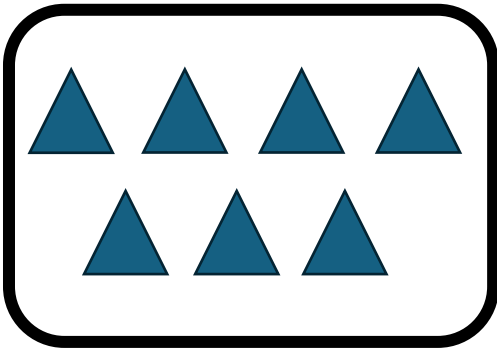
$$\begin{array}{c} \wedge \\ \dots \quad \dots \end{array}$$



$$8 + 9 = \dots\dots$$

$$\begin{array}{c} \wedge \\ \dots \quad \dots \end{array}$$

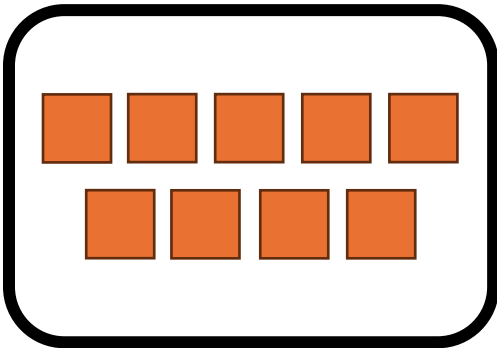
7. Teken bij en los op.



$$7 + 6 = \dots\dots$$

^

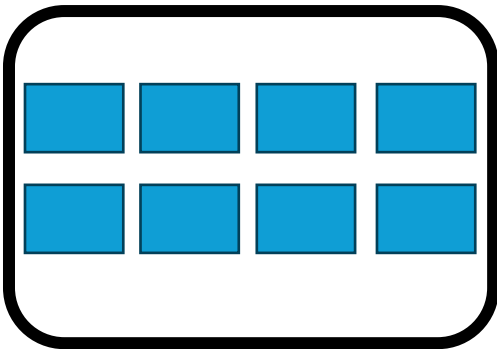
... ..



$$9 + 3 = \dots\dots$$

^


... ..



$$8 + 7 = \dots\dots$$

^

... ..



$$5 + 9 = \dots\dots$$

^

... ..

8. Los op.

$7 + 8 = \dots\dots$

$9 + 9 = \dots\dots$

$6 + 5 = \dots\dots$

$3 + 9 = \dots\dots$

$2 + 8 = \dots\dots$

$7 + 7 = \dots\dots$

$4 + 8 = \dots\dots$

$8 + 6 = \dots\dots$

$6 + 6 = \dots\dots$


$1 + 9 = \dots\dots$

$9 + 8 = \dots\dots$


$7 + 5 = \dots\dots$

Aftrekken tot 20 met brug


1. Schrap en los op.




$$10 - 6 = \dots\dots$$




$$10 - 9 = \dots\dots$$




$$10 - 3 = \dots\dots$$




$$10 - 7 = \dots\dots$$




$$10 - 1 = \dots\dots$$



$$10 - 8 = \dots\dots$$




$$10 - 2 = \dots\dots$$




$$10 - 5 = \dots\dots$$


2. Schrap tot je er 10 over hebt. Vul aan.




$$14 - \dots = 10$$




$$18 - \dots = 10$$




$$16 - \dots = 10$$



$$12 - \dots = 10$$



$$19 - \dots = 10$$



$$13 - \dots = 10$$

3. Los op.

$17 - 7 = \dots\dots$

$17 - 7 - 3 = \dots\dots$

$19 - 9 = \dots\dots$

$19 - 9 - 8 = \dots\dots$

$13 - 3 = \dots\dots$

$13 - 3 - 5 = \dots\dots$

$18 - 8 = \dots\dots$

$18 - 8 - 2 = \dots\dots$


$14 - 4 = \dots\dots$

$14 - 4 - 9 = \dots\dots$



$11 - 1 = \dots\dots$

$11 - 1 - 7 = \dots\dots$


4. Schrap en los op.



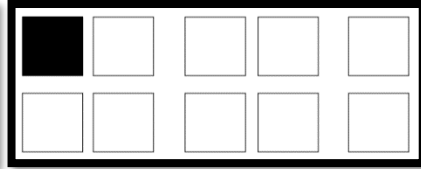

$14 - 9 = \dots\dots$



$17 - 8 = \dots\dots$

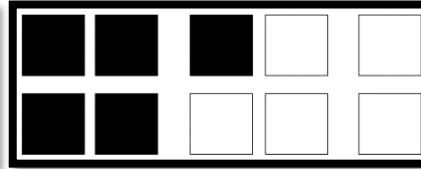



$12 - 5 = \dots\dots$





$$11 - 5 = \dots\dots$$

... ..



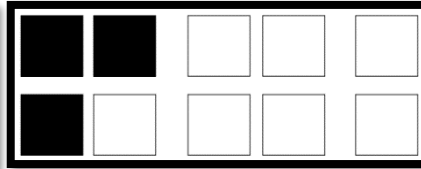

$$15 - 8 = \dots\dots$$

... ..



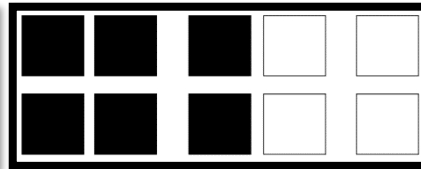

$$18 - 9 = \dots\dots$$

... ..





$$13 - 6 = \dots\dots$$

... ..



$$16 - 7 = \dots\dots$$

... ..



$$19 - 9 = \dots\dots$$

... ..

5. Los op.

$12 - 8 = \dots\dots$

$13 - 9 = \dots\dots$

$11 - 2 = \dots\dots$

$15 - 8 = \dots\dots$

$18 - 9 = \dots\dots$

$14 - 7 = \dots\dots$

$16 - 7 = \dots\dots$

$13 - 8 = \dots\dots$

$16 - 8 = \dots\dots$