




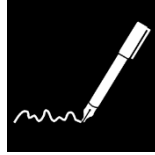
REKENEN TOT 10

Correctiesleutel


Meester Warre
www.meesterwarre.be

 [@meesterwarre](https://www.instagram.com/meesterwarre)


 [Meester Warre](https://www.facebook.com/MeesterWarre)




10




3




4




8




5



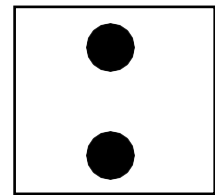
6



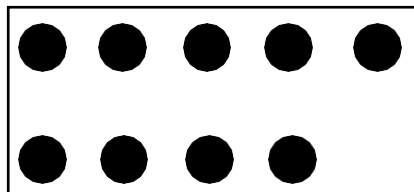
1





7



2



9



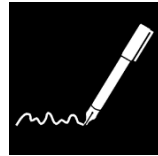


$$\begin{array}{c} \bullet \bullet \\ \bullet \end{array} + \begin{array}{c} \bullet \bullet \bullet \\ \bullet \bullet \end{array} = \begin{array}{|c|c|c|c|} \triplearrowright \bullet & \bullet & \bullet & \bullet \\ \triplearrowright \bullet & \bullet & \bullet & \bullet \\ \end{array}$$

$$\begin{array}{c} \bullet \\ \bullet \end{array} + \begin{array}{c} \bullet \bullet \bullet \bullet \\ \bullet \bullet \bullet \bullet \end{array} = \begin{array}{|c|c|c|c|c|} \triplearrowright \bullet & \bullet & \bullet & \bullet & \bullet \\ \triplearrowright \bullet & \bullet & \bullet & \bullet & \bullet \\ \end{array}$$

$$\bullet + \begin{array}{c} \bullet \bullet \bullet \bullet \bullet \\ \bullet \bullet \bullet \end{array} = \begin{array}{|c|c|c|c|c|} \triplearrowright \bullet & \bullet & \bullet & \bullet & \bullet \\ \triplearrowright \bullet & \bullet & \bullet & \bullet & \bullet \\ \end{array}$$

$$\begin{array}{c} \bullet \bullet \bullet \\ \bullet \bullet \bullet \end{array} + \begin{array}{c} \bullet \bullet \\ \bullet \bullet \end{array} = \begin{array}{|c|c|c|c|c|} \triplearrowright \bullet & \bullet & \bullet & \bullet & \bullet \\ \triplearrowright \bullet & \bullet & \bullet & \bullet & \bullet \\ \end{array}$$

$$\begin{array}{c} \bullet \bullet \bullet \\ \bullet \bullet \end{array} + \begin{array}{c} \bullet \bullet \bullet \\ \bullet \bullet \end{array} = \begin{array}{|c|c|c|c|c|} \triplearrowright \bullet & \bullet & \bullet & \bullet & \bullet \\ \triplearrowright \bullet & \bullet & \bullet & \bullet & \bullet \\ \end{array}$$

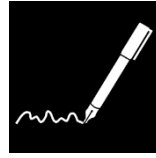
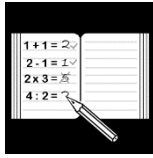


$$\begin{array}{ccccccc} \begin{array}{c} \bullet \bullet \\ \bullet \end{array} & + & \begin{array}{c} \bullet \bullet \bullet \\ \bullet \bullet \bullet \end{array} & = & \begin{array}{|c|} \hline \bullet \bullet \bullet \bullet \bullet \\ \hline \bullet \bullet \bullet \bullet \bullet \\ \hline \end{array} \\ 3 & + & 7 & = & 10 \end{array}$$

$$\begin{array}{ccccccc} \begin{array}{c} \bullet \bullet \bullet \\ \bullet \bullet \end{array} & + & \bullet & = & \begin{array}{|c|} \hline \bullet \bullet \bullet \\ \hline \bullet \bullet \\ \hline \end{array} \\ 5 & + & 1 & = & 6 \end{array}$$

$$\begin{array}{ccccccc} \begin{array}{c} \bullet \bullet \\ \bullet \bullet \end{array} & + & \bullet & = & \begin{array}{|c|} \hline \bullet \bullet \bullet \\ \hline \bullet \bullet \bullet \\ \hline \end{array} \\ 4 & + & 2 & = & 6 \end{array}$$

$$\begin{array}{ccccccc} \begin{array}{c} \bullet \bullet \bullet \\ \bullet \bullet \bullet \end{array} & + & \bullet & = & \begin{array}{|c|} \hline \bullet \bullet \bullet \bullet \bullet \\ \hline \bullet \bullet \bullet \bullet \bullet \\ \hline \end{array} \\ 6 & + & 2 & = & 8 \end{array}$$




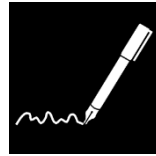
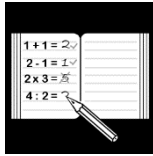
$$6 + 3 = 9$$

$$2 + 5 = 7$$


$$1 + 8 = 9$$

$$4 + 0 = 4$$


$$7 + 3 = 10$$




$$8 - 5 = 3$$




$$10 - 7 = 3$$




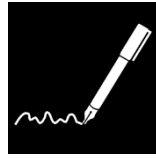
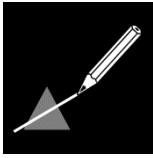
$$6 - 2 = 4$$




$$5 - 5 = 0$$




$$9 - 4 = 5$$




$$8 - 5 = 3$$



$$3 - 1 = 2$$



$$10 - 4 = 6$$



$$4 - 3 = 1$$